

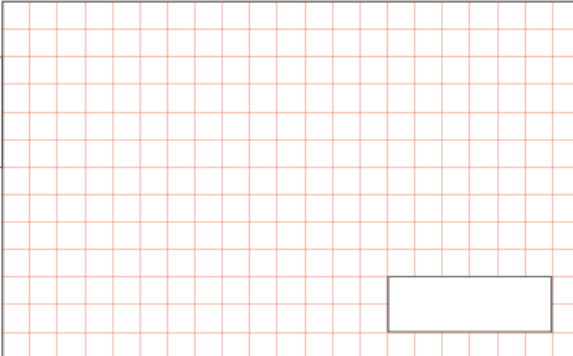
Term 4 Week 3 Maths Homework
Due: Wednesday 19th March 2025
Reasoning – Mixed Word Problems

- 1 A baker needs to make 685 desserts for an event.
He has made trays of brownies and cookies.
This table shows the number of trays he has made of each
dessert and how many are in each tray.

Type of dessert	Number of trays	Number of dessert in each tray
Brownies	12	18
Cookies	14	14

How many more desserts does he need to make?

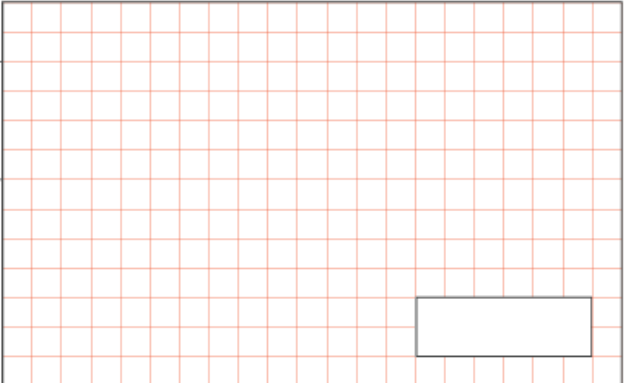
Show your method



- 2 Bea is writing the first chapter of her book
She has written 3,928 words.
She writes another 598 words.
She wants to write 5,000 words in total
for the first chapter.

How many more words does she need to write?

Show your method



- 3 How many days are there in June, July and August altogether?

Term 4 Week 3 Maths Homework
Due: Wednesday 19th March 2025
Reasoning – Mixed Word Problems

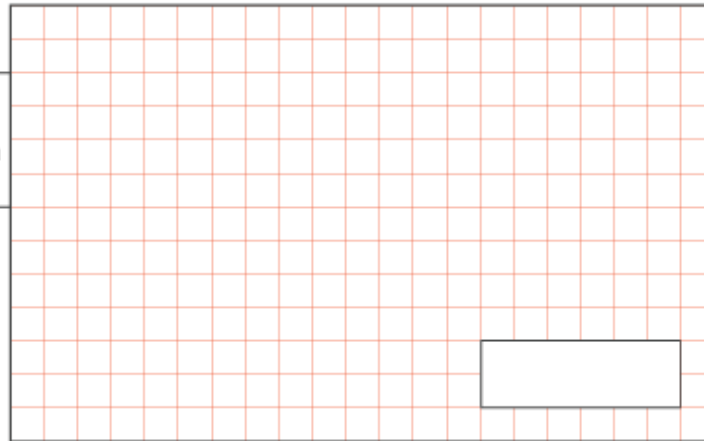
4

A class's reading corner has 230 books.

7 children take 8 books each.

How many books are left in the reading corner?

Show
your
method



5

Aiden, Sam and Hassan are building towers.

Aiden's tower is 54cm tall.

Sam's tower is 8cm shorter than Aiden's.

Hassan's tower is 12cm taller than Sam's.

How tall is Hassan's tower in cm?

6

Whiteboards are sold in packs of 12.

Mrs S has 30 children in her class.

How many packs must she buy?

How many whiteboards will she have left over?

Whiteboard pens are sold in packs of 20.

Mrs S buys 2 packs.

How many whiteboard pens will she have left over?