







Year 4 Multiplication and Division

Word Problems x6 x7 x9

<p>1. There are 8 chocolates in a bag, and Josef has 6 bags to sell. How many chocolates are there in total?</p> <div style="text-align: center;">  </div> <div style="border: 1px solid black; height: 30px; width: 100%; margin-top: 10px;"></div>	<p>2. Sarah gets \$4 pocket money from her parents every day of the week if she does all of her chores. How much pocket money would she get in a week?</p> <div style="text-align: center;">  </div> <div style="border: 1px solid black; height: 30px; width: 100%; margin-top: 10px;"></div>	<p>3. The farmer plants carrots in rows of 9. He decides to plant 7 rows of carrots. How many carrots are there in total?</p> <div style="text-align: center;">  </div> <div style="border: 1px solid black; height: 30px; width: 100%; margin-top: 10px;"></div>
<p>4. Mary downloaded the same number of apps for her phone each week. She downloaded 54 apps over a period of 9 weeks. How many apps did she download each week?</p> <div style="text-align: center;">  </div> <div style="border: 1px solid black; height: 30px; width: 100%; margin-top: 10px;"></div>	<p>5. Joe plants 5 bushes in his garden. Each bush blooms 6 flowers. How many flowers are there in total?</p> <div style="text-align: center;">  </div> <div style="border: 1px solid black; height: 30px; width: 100%; margin-top: 10px;"></div>	<p>6. If I save \$21 in one week (saving an equal amount each day), how much money do I save each day?</p> <div style="text-align: center;">  </div> <div style="border: 1px solid black; height: 30px; width: 100%; margin-top: 10px;"></div>
<p>7. Francis is very good at hurdles. She can jump 9 hurdles in a 200 metre race. However, Johnathon can jump twice as many. How many hurdles can he jump?</p> <div style="border: 1px solid black; height: 30px; width: 100%; margin-top: 10px;"></div>	<p>8. It takes 24 minutes for Jessica to ride her bike to school. On the way, she stops at regular intervals to retie her shoelaces. She stops 4 times on her trip. How many minutes were between each stop?</p> <div style="border: 1px solid black; height: 30px; width: 100%; margin-top: 10px;"></div>	<p>9. My teacher decided to reward us with a pizza party at the end of the week. There are 21 people in my class, and each person is allowed 2 pieces of pizza. A pizza has 7 slices. How many pizzas does he need to buy?</p> <div style="border: 1px solid black; height: 30px; width: 100%; margin-top: 10px;"></div>