

**** Please complete one task (or more if your child is able to) ****

Counting in 2s



Shoes, boots and slippers come in pairs. A pair is 2 shoes. Count the number of shoes shown.

1.



2.



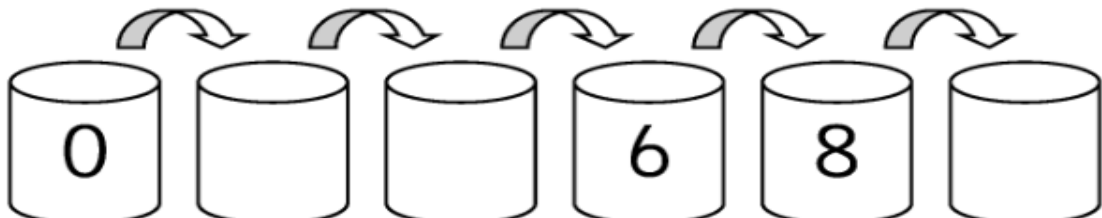

3.



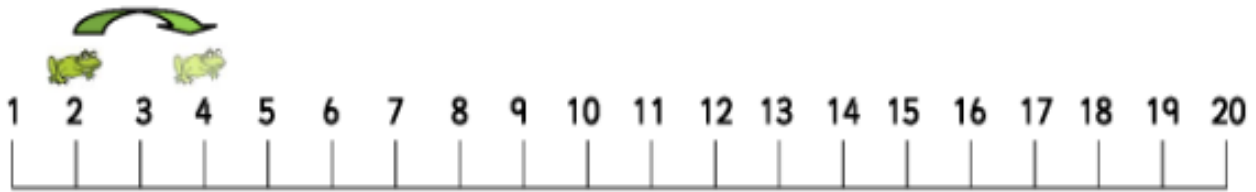
Counting in twos
Maths worksheets from urbrainy.com



Hop along in twos and fill in the missing numbers.

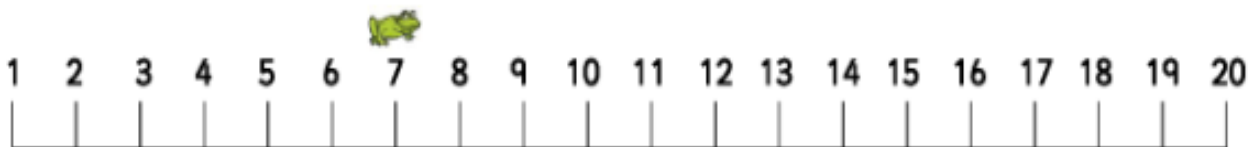


Challenge!



1. Start at 2. Count 6 hops of 2 along the number line.

What number do you land on?



2. Start at 7. Count 5 hops of 2 along the number line.

What number do you land on?



3. Start at 9. Count 4 hops of 2 along the number line.

What number do you land on?

**** Please complete one task (or more if your child is able to) ****


Fill in the gaps to make the 'th' words.

__ _ in 

__ _ ud 

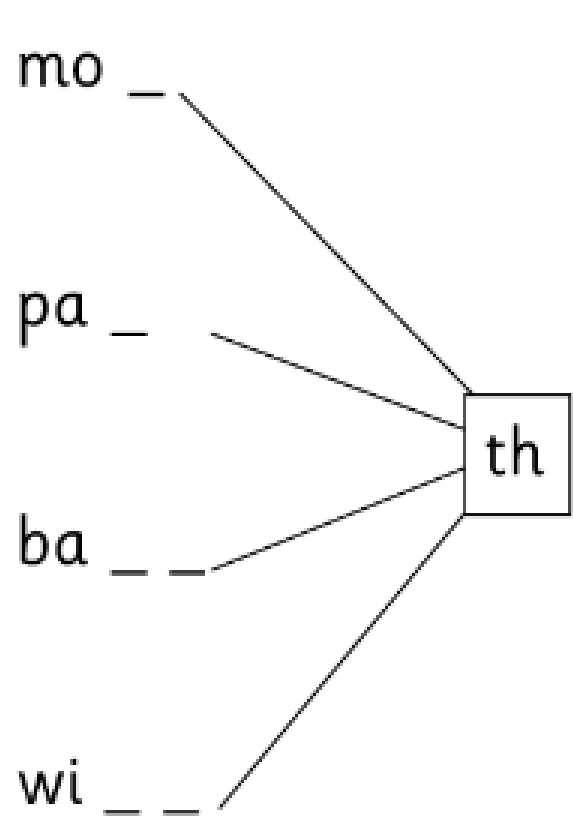
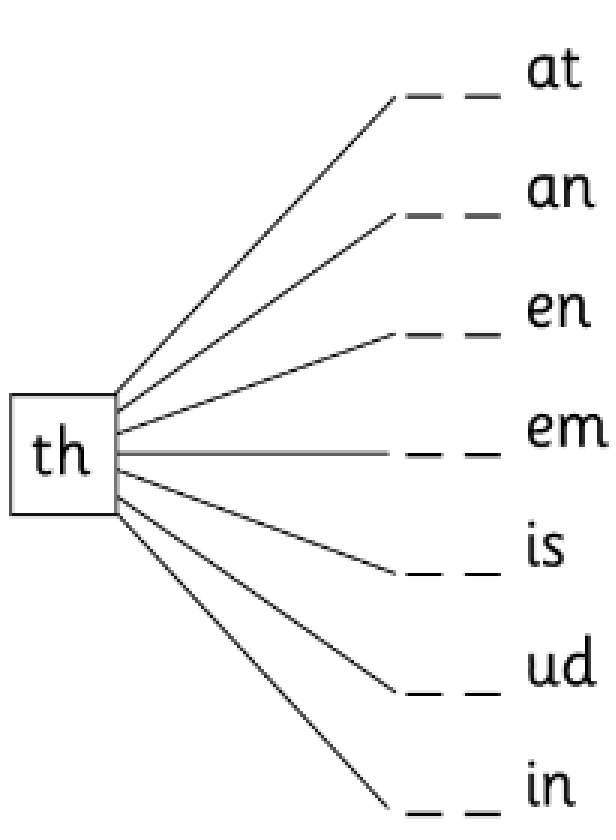
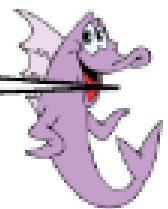
__ _ ink 

 mo __ _

 ba __ _

 pa __ _

Add 'th' to complete the words and then read them out loud.





Choose from the following words to fill the gaps.

tonight

high

light

tight

right

1. It was windy and we held on to our hats.
2. When it got dark Jan put the on.
3. At the end of the street turn
4. The plane was up in the sky.
5. We are sleeping in a tent

Draw a little picture of one of the sentences.



Draw the picture to go with the caption.



a bright light on the table



the moon high up in the sky



I got the sum right



the boys had a fight