
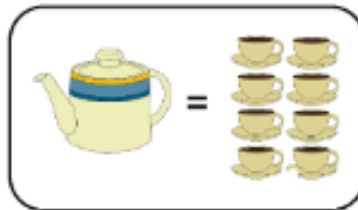


**\*\* Please complete one task (or more if your child is able to) \*\***

Compare capacity (2)  
Maths worksheets from urbrainy.com



I have been comparing teapots to see how many cups of tea they hold. Use the words 'more' or 'less' to fill in the boxes.



The  holds  than the .

The  holds  than the .

The  holds  than the .

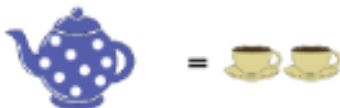
Draw a line to match each sentence to the correct picture.



Holds less than 4 cups.



Holds more than 4 cups.








Holds 4 cups.

## Challenge!



You need a litre jug for this activity,  
as well as other containers.

How many fill a litre jug?


Containers	Number to fill a litre jug
Cups 	
Glasses 	
Bottles 	
Cereal bowl 	
Plastic pot 	


**\*\* Please complete one task (or more if your child is able to) \*\***

# 'igh' Read and Write

Read the 'igh' words below. Look at the pictures and write each word under the correct picture. Read the word again to make sure it's correct

light	night	sigh	knight	sight
fight	high	right	tights	thigh




fish and chips



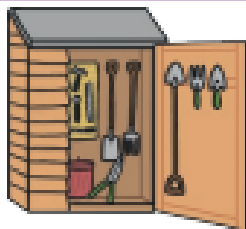
a bright torch



tools in a shed




looking at books



dig in the soil

## Pop to the Shop

- 8 Will you pop to the shop for me?  
18 I need you to get butter, eggs and a loaf.  
27 Go down the road and then up the hill.  
37 Turn right at the church that is near the pool.  
47 Be quick or you will get wet in the rain!



## Read Together Quick Questions



1. Find and copy one word that means the same as 'fast'.

\_\_\_\_\_



2. Name **two** of the things that the person should get from the shop.

\_\_\_\_\_

\_\_\_\_\_



3. What might happen if the person takes too long getting to the shop?

\_\_\_\_\_

\_\_\_\_\_



4. Number these instructions from 1-3 to show the order that they appear in the text.

- ☐ Be quick.  
☐ Go down the road.  
☐ Turn right at the church.

Challenge!