

Year 2 Homework

Tuesday 18th January 2022 (to be handed in by Monday 24th January 2022)

Maths - In maths we are learning about adding numbers together in columns.

Answer these questions in your homework book by printing off the sheet or drawing and writing the answers.



Use the place value charts and concrete materials to complete the calculations.

Examples of how to add in columns

Tens	Ones
	
	

$$\begin{array}{r} 23 \\ + 40 \\ \hline \end{array}$$

Find the total of 28 and 7

Tens	Ones	
		28
		+ 7

		35
		1

- Partition both the numbers.
- Add together the ones.
- Have we got 10 ones?
- Exchange 10 ones for 1 ten.
- How many ones do we have?
- How many tens do we have?

Now choose questions to complete at your level using columns and drawing the dienes (tens and ones) to add. **Remember to always add the ones first!**

$5 + 3 =$

$2 + 4 =$

$4 + 6 =$

$7 + 2 =$

$6 + 1 =$

$15 + 13 =$

$14 + 14 =$

$15 + 11 =$

$22 + 17 =$

$24 + 22 =$

$34 + 32 =$

$47 + 23 =$

$38 + 26 =$

$63 + 27 =$

$29 + 72 =$

Challenge

Here are three digit cards.



Place the digit cards in the number sentence.

How many different totals can you find?

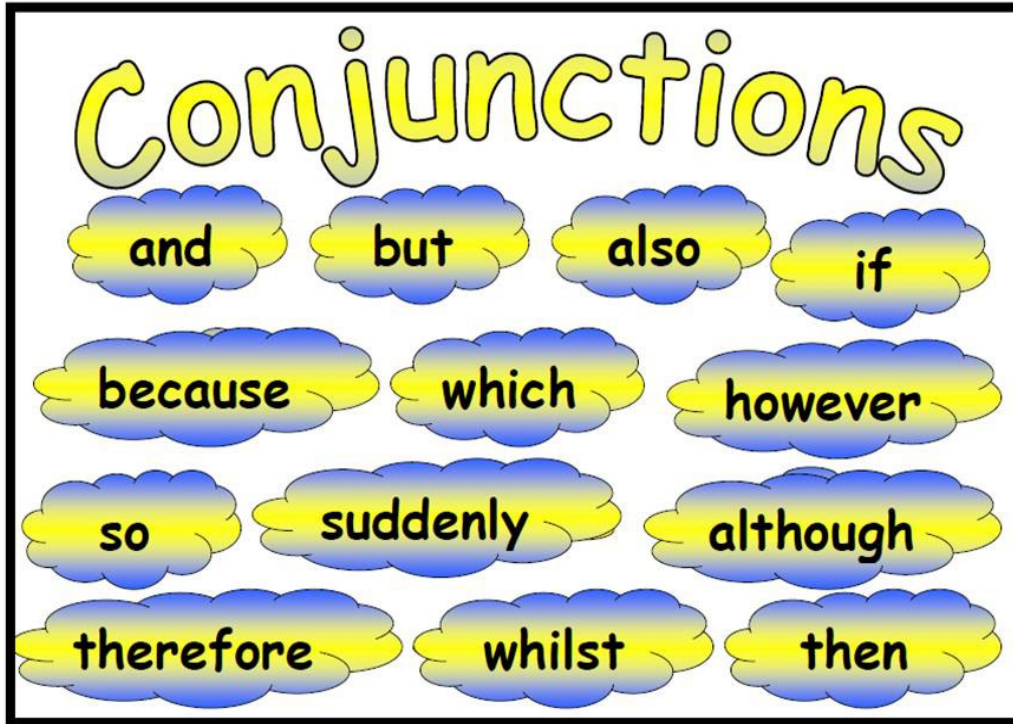
$\square\square + \square =$

What is the smallest total?

What is the largest total?

Literacy - This week we are learning to extend sentences using conjunctions. Use the word bank below to write your own sentences using a conjunction each time.

Remember to use capital letters and full stops and check your spellings.



Spellings

Your child will be bringing home spellings to learn this week.

Please practise these words at home ready for a test on Friday.