




Year 3 Maths Homework


Flashback 4

Year 3 | Week 5 | Day 3

1) How many animals are there altogether?

Animals	Number in shop
Fish	
Hamsters	
Guinea Pigs	

Key

 = 4 animals



2) Write 548p in pounds and pence.


3) Find the product of 18 and 4

4) What is $345 - 100$?




Now try this:


4. Draw a straight line from each of the dots below, using a ruler to match the measurements on the right.


↑
Start your line here

8cm


↑
Start your line here

34mm


↑
Start your line here

10cm



