


**\*\* Please complete one task (or more if your child is able to) \*\***

Which is heavier?  
Maths worksheets from urbrainy.com



Draw a circle around the object in each box that you think would weigh more.

1.



2.



3.



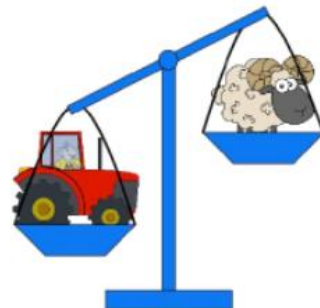
4.



Comparing weight: heavier, lighter, equal  
Maths worksheets from urbrainy.com



Use the words 'lighter', 'heavier' or 'equal' to fill in the boxes.

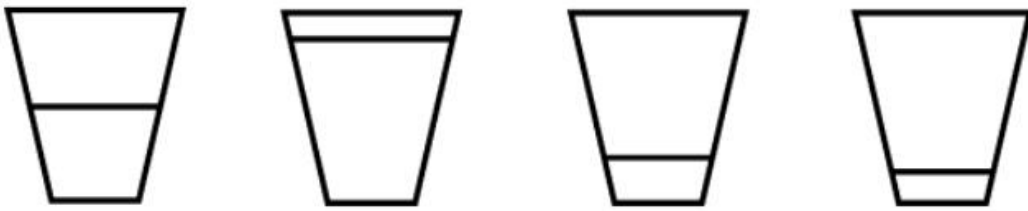


1. The ball is  than the chicken.

2. The boat is  to the bus.

3. The tractor is  than the sheep.

Empty or full?



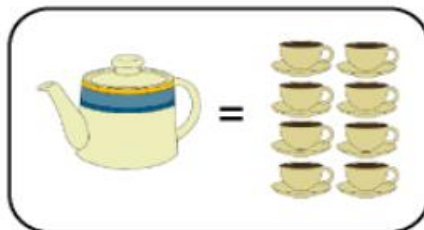
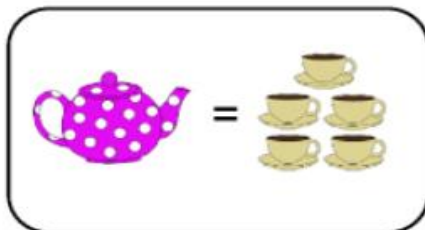
Colour the water in the fullest glass red.

Colour the water in the emptiest glass blue.

Colour the water in the glass which is nearly half full green.



I have been comparing teapots to see how many cups of tea they hold. Use the words 'more' or 'less' to fill in the boxes.



The  holds  than the .

The  holds  than the .

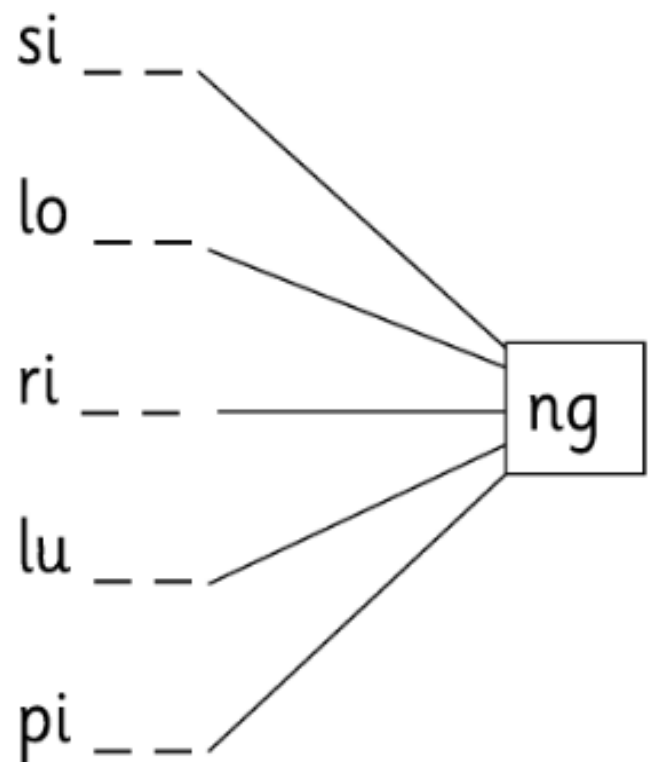
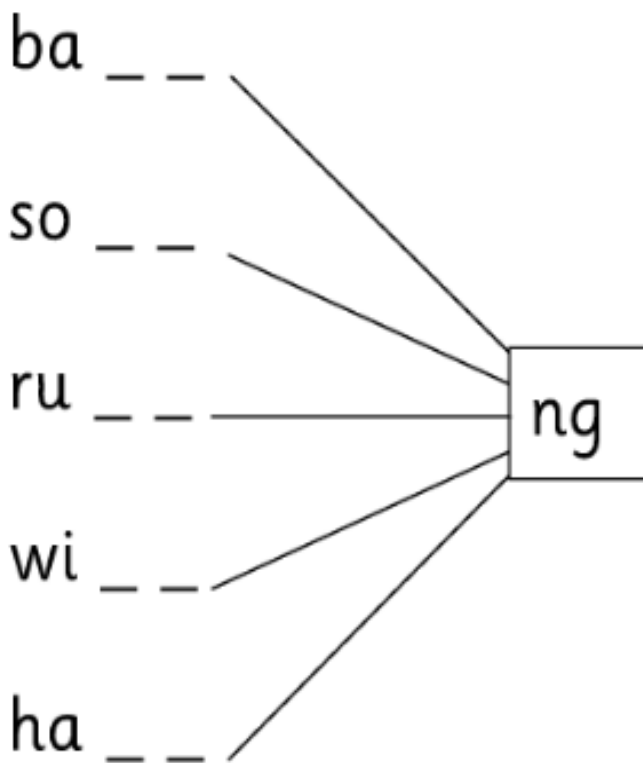
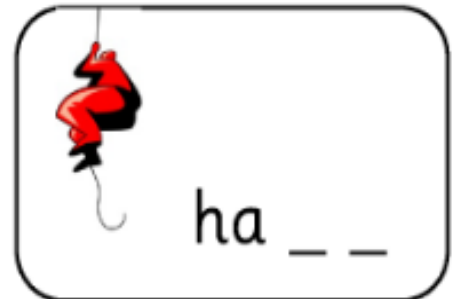

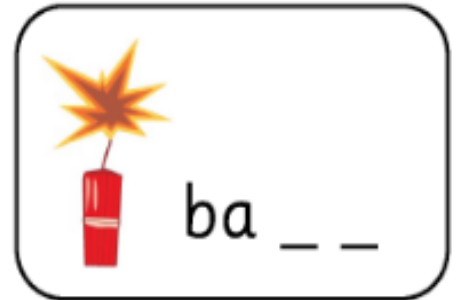
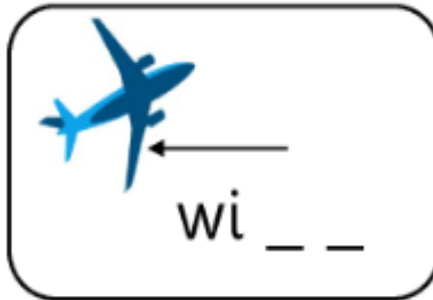
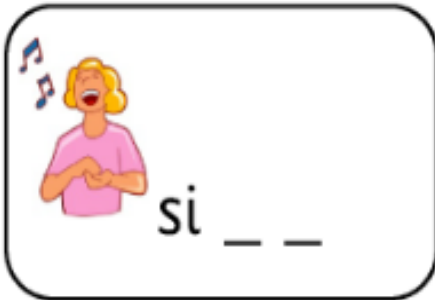
The  holds  than the .

**\*\* Please complete one task (or more if your child is able to) \*\***

ng words  
English worksheets from urbrainy.com



Fill in the gaps to make the 'ng' words.





Hi. I've written a short story about the rain, but my sentences have got mixed up.  
Can you write the story in the correct order?

Sam put his boots on.  
He took his wet clothes off.  
He splashed in the puddles.  
It was pouring with rain.



---

---

---

---

---

Draw a picture to go with the story.