

In maths this week we are learning about length and height.


**** Please complete one task (or more if your child is able to) ****



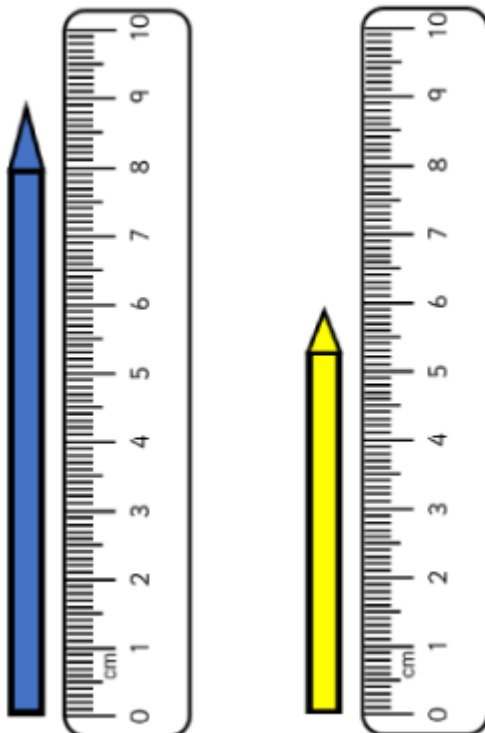
Please help me to work out which is taller.

Draw a ring around the taller thing in each question.

1)



2)




Which coloured pencil is the tallest?

The blue pencil is cm tall.

The yellow pencil is cm tall.

The pencil is the tallest.

Challenge!

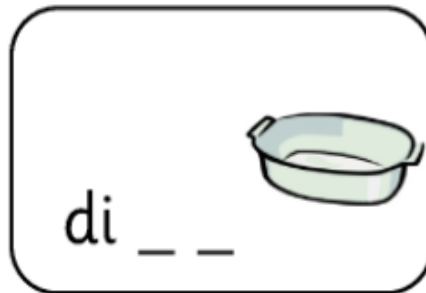

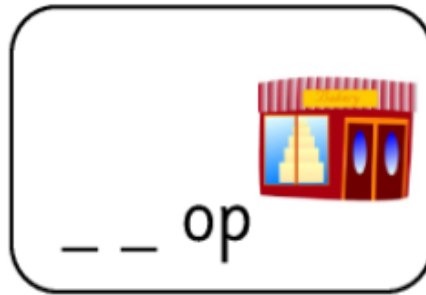



Peter says that the rose is 6 cubes tall. Is he correct?

Explain your answer:

**** Please complete one task (or more if your child is able to) ****

Fill in the gaps to make the 'sh' words.



Choose from the following words to fill the gaps in the sentences.



fish

sheep

shed

shop

shut

1. The were on the hills.
2. The shop was for the day.
3. Mum went to the to get some ham.
4. There were six in the tank.

Challenge!

Describing characters: the swimmer
English worksheets from urbrainy.com



Try to describe the girl. Think about these questions:

1. What does she look like?
2. What is she thinking?
3. What is she going to do?
4. What will happen next?

Write some sentences to describe the girl and what happens next.