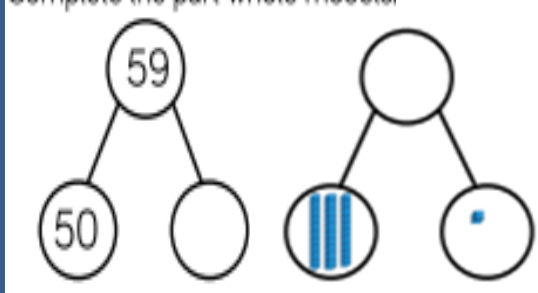


Year 2 Homework

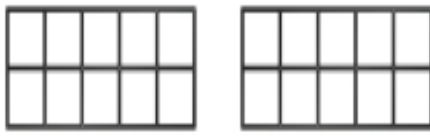
Tuesday 21st September 2021 (to be handed in by Monday 27th September)

Maths - In maths we have been learning about place value and showing numbers in different ways. Answer these questions in your homework book by printing off the sheet or drawing and writing the answers.

1) Complete the part-whole models.



2) Fill in the ten frames with counters to show 14 and complete the sentence.





14 has ____ ten and ____ ones.

3) Match the numerals to the words.

17 48 38 70

thirty-eight seventy forty-eight seventeen

4) What number is represented in the place value chart?

Tens	Ones
	

Challenge questions!

Fill in the missing numbers.

1 ten + 3 ones = 13



2 tens + ____ ones = 23


3 tens + 3 ones = ____


____ tens + 3 ones = 43

What would the next number in the pattern be?

Dora and Amir both try to build the same number.

 Dora  Amir





Who is correct?

Can you explain the mistake that has been made?

Literacy - This week we have been reading **The Enormous Crocodile**. Please write a book review about the story. 1) What was it about? 2) Who were the characters? 3) Which parts did you like best? 4) Did you enjoy the story? Why?

Remember to use capital letters and full stops! You can also draw a picture.