


## Year 2 Homework

Tuesday 28<sup>th</sup> September 2021 (to be handed in by Monday 4<sup>th</sup> October)

**Maths** - In maths we have been learning about addition and showing addition in different ways. Answer these questions in your homework book by printing off the sheet or drawing and writing the answers.

1 What number bonds to 20 are represented?

The first one has been done for you.

a)   $15 + 5 = 20$

b) 

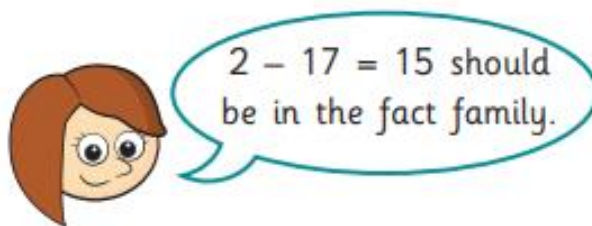
c) 

d) How many other number bonds to 20 can you make using counters and ten frames?

2 Complete the fact family.

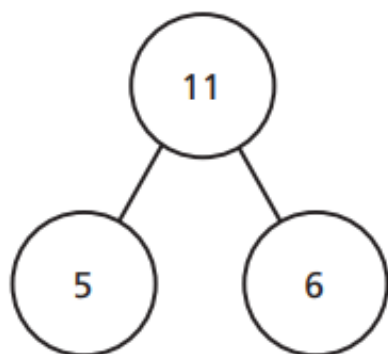
a)  $15 + 2 = 17$        $17 - 15 = \square$   
 $17 = 15 + 2$        $\square = \square - \square$   
 $2 + 15 = \square$        $\square - \square = \square$   
 $\square = \square + \square$        $\square = \square - \square$

b)



Explain why Rosie is wrong.

- 3 Complete the number sentences for the part-whole model.



$$\square + \square = \square$$

$$\square - \square = \square$$

$$\square + \square = \square$$

$$\square - \square = \square$$

Are there any other number sentences in this fact family?

Talk about it with a partner.

**Literacy** - This week we have been reading **Mrs Armitage**. At the end of the story, Mrs Armitage buys herself some roller-skates. In the style of the story, can you write about what Mrs Armitage would like to add to her roller-skates. "What these roller-skates need" Mrs Armitage said to herself "are....."

**Remember to use capital letters and full stops!** You can also draw a picture.